


Section 13.2

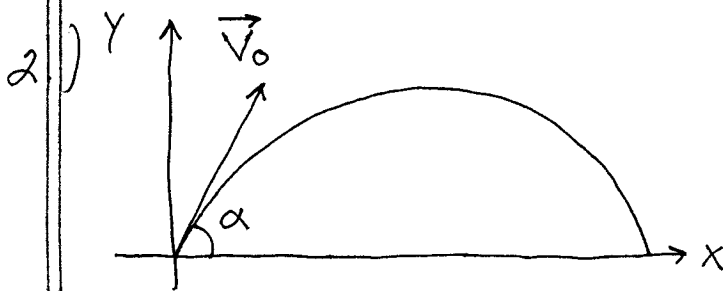
$$x(t) = |\vec{v}_0| \cos \alpha \cdot t, \quad y(t) = |\vec{v}_0| \sin \alpha \cdot t - \frac{1}{2} g \cdot t^2$$



$$x(t) = (840)(\cos 60^\circ) t = (840)\left(\frac{1}{2}\right) t = 420 t \rightarrow$$

$$x(t) = 420 t; \quad \text{if } x(t) = 21 \text{ km} = 21,000 \text{ m.} \rightarrow$$

$$420 t = 21,000 \rightarrow t = 50 \text{ sec.}$$



$$y(t) = |\vec{v}_0| \sin \alpha \cdot t - \frac{1}{2} (9.8) t^2$$

$$= |\vec{v}_0| \sin \alpha \cdot t - 4.9 t^2; \quad \text{find flight time} \rightarrow y(t) = 0 \rightarrow t (|\vec{v}_0| \sin \alpha - 4.9 t) = 0$$

$$\rightarrow t = \frac{|\vec{v}_0| \sin \alpha}{4.9} \text{ sec.}; \quad \text{downrange}$$

distance is

$$x(t) = |\vec{v}_0| \cos \alpha \cdot t = |\vec{v}_0| \cos \alpha \cdot \frac{|\vec{v}_0| \sin \alpha}{4.9} \rightarrow$$

$$x = \frac{|\vec{v}_0|^2}{4.9} \sin \alpha \cos \alpha; \quad \text{find angle } \alpha$$

which maximizes x :

$$\frac{dx}{d\alpha} = \frac{|\vec{v}_0|^2}{4.9} (\sin\alpha \cdot (-\sin\alpha) + \cos\alpha \cdot \cos\alpha)$$

$$= \frac{|\vec{v}_0|^2}{4.9} (\cos^2\alpha - \sin^2\alpha) = 0 \rightarrow$$

$$\cos^2\alpha = \sin^2\alpha \rightarrow \alpha = 45^\circ, \text{ then}$$

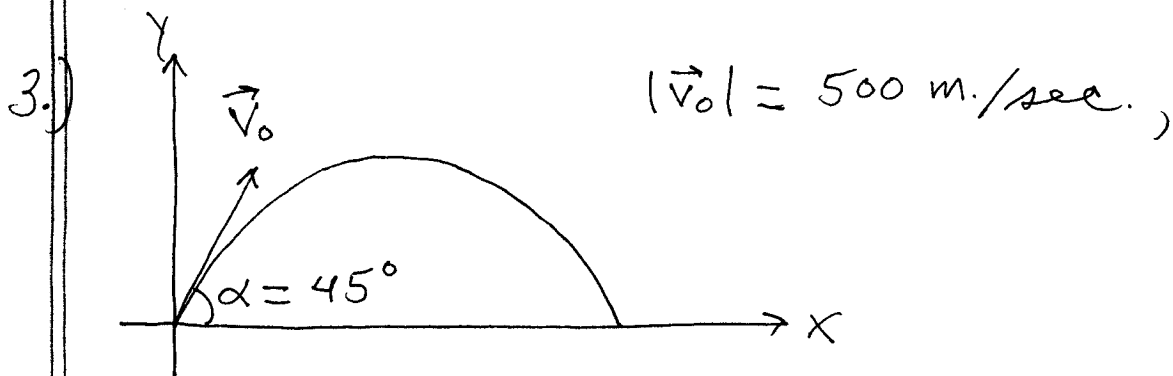
$$x = \frac{|\vec{v}_0|^2}{4.9} \sin 45^\circ \cdot \cos 45^\circ = \frac{|\vec{v}_0|^2}{4.9} \left(\frac{\sqrt{2}}{2}\right) \left(\frac{\sqrt{2}}{2}\right) \rightarrow$$

$$x = \frac{|\vec{v}_0|^2}{9.8}; \text{ if max. range is}$$

$$24,500 \text{ m then } \frac{|\vec{v}_0|^2}{9.8} = 24,500 \rightarrow$$

$$|\vec{v}_0|^2 = (24,500)(9.8) \rightarrow$$

$$|\vec{v}_0| = \sqrt{240,100} = 490 \text{ m./sec.}$$



$$x(t) = (500) \cos 45^\circ \cdot t = (500) \frac{\sqrt{2}}{2} t = 250\sqrt{2} t \rightarrow$$

$$x(t) = 250\sqrt{2} t ;$$

$$y(t) = (500) \sin 45^\circ \cdot t - \frac{1}{2}(9.8)t^2$$

$$= (500) \left(\frac{\sqrt{2}}{2}\right) t - 4.9t^2 = 250\sqrt{2} t - 4.9t^2 \rightarrow$$

$$y(t) = 250\sqrt{2} t - 4.9 t^2 ;$$

a.) find flight time : $y(t) = 0 \rightarrow$
 $t(250\sqrt{2} - 4.9t) = 0 \rightarrow t = \frac{250\sqrt{2}}{4.9} \approx 72.15 \text{ sec.}$

distance downrange:

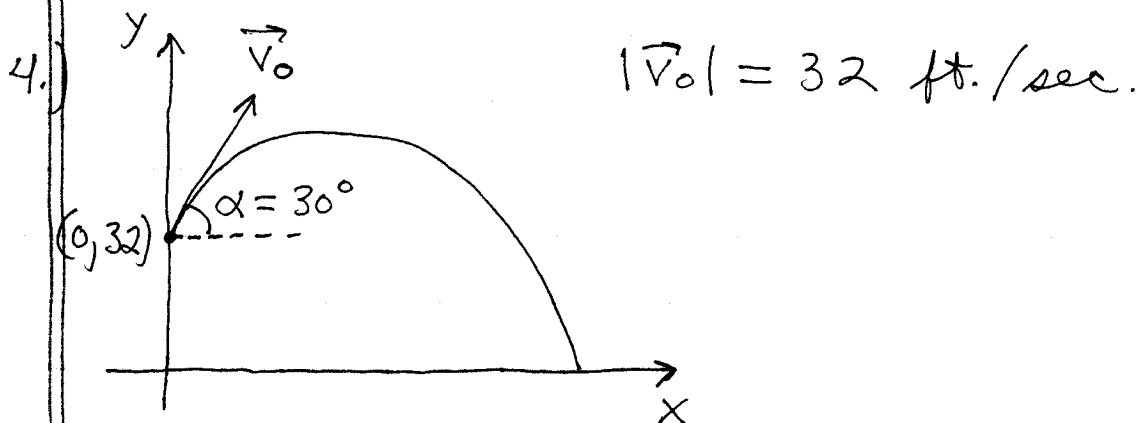
$$x(72.15) = 250\sqrt{2} \cdot (72.15) \approx 25,510.2 \text{ m.}$$

b.) If $x(t) = 5000 \text{ m} \rightarrow 250\sqrt{2}t = 5000 \rightarrow$
 $t = \frac{5000}{250\sqrt{2}} \approx 14.14 \text{ sec.}$, and height is

$$y(14.14) = 250\sqrt{2}(14.14) - 4.9(14.14)^2 \approx 4019.5 \text{ m.}$$

c.) maximum $y(t)$: $y'(t) = 0 \rightarrow$
 $250\sqrt{2} - 9.8t = 0 \rightarrow t = \frac{250\sqrt{2}}{9.8} \approx 36.1 \text{ sec.}$

$$\rightarrow y(36.1) = 250\sqrt{2}(36.1) - 4.9(36.1)^2 \approx 6377.5 \text{ m.}$$



$$x(t) = (32) \cdot \cos 30^\circ \cdot t \quad \text{and}$$

$$y(t) = b + |\vec{v}_0| \sin \alpha \cdot t - \frac{1}{2} g t^2$$

$$= 32 + (32) \sin 30^\circ \cdot t - \frac{1}{2} (32) t^2$$

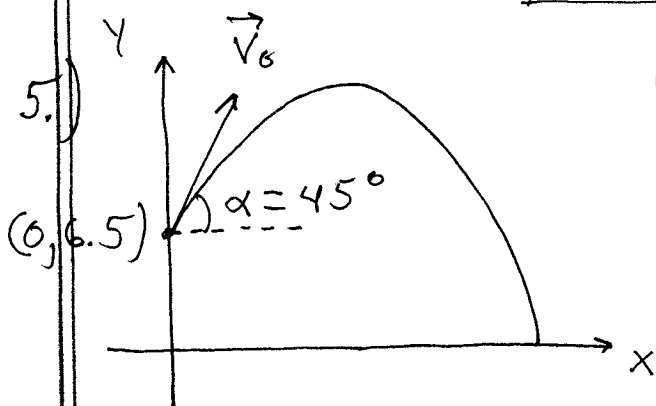
$$= 32 + (32) \left(\frac{1}{2}\right) t - 16 t^2$$

→ $y(t) = 32 + 16t - 16t^2$; flight time →

$y(t) = 0 \rightarrow 32 + 16t - 16t^2 = 0 \rightarrow$
 $-16(t^2 - t - 2) = -16(t-2)(t+1) = 0 \rightarrow$

$t = 2 \text{ sec.}$; distance downrange is

$x(2) = (32) \cdot \cos 30^\circ \cdot (2) = (32) \left(\frac{\sqrt{3}}{2}\right) (2)$
 $= 32\sqrt{3} \approx \boxed{55.4 \text{ ft}}$



$|\vec{v}_0| = 44 \text{ ft./sec.}$

$x(t) = (44) \cos 45^\circ \cdot t$
 $= (44) \cdot \frac{\sqrt{2}}{2} t \rightarrow$

$x(t) = 22\sqrt{2} t$;

$y(t) = 6.5 + (44) \sin 45^\circ \cdot t - \frac{1}{2}(32)t^2$
 $= 6.5 + (44) \left(\frac{\sqrt{2}}{2}\right) t - 16t^2 \rightarrow$

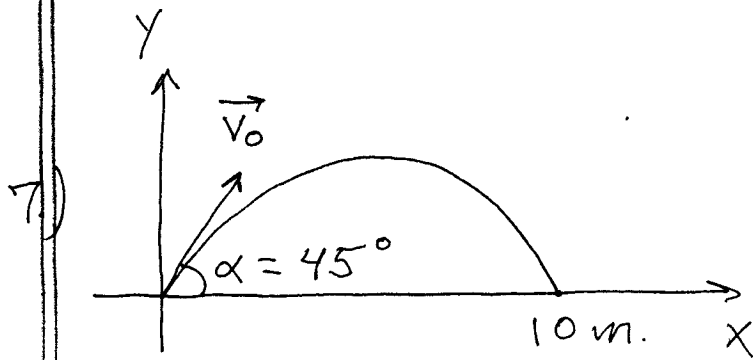
$y(t) = 6.5 + 22\sqrt{2} t - 16t^2$; flight time

→ $y(t) = 0 \rightarrow -16t^2 + 22\sqrt{2} t + 6.5 = 0 \rightarrow$

$t = \frac{-22\sqrt{2} \pm \sqrt{(22\sqrt{2})^2 - 4(-16)(6.5)}}{2(-16)}$

$\approx \frac{-22\sqrt{2} \pm 37.2}{-32} \approx \boxed{2.135 \text{ sec.}}$ So

$x(2.135) \approx 22\sqrt{2} (2.135) \approx \boxed{66.4 \text{ ft.}}$



a.) Downrange distance :

$$x(t) = \frac{2 |\vec{v}_0|^2 \cos \alpha \sin \alpha}{g} \rightarrow$$

$$10 = \frac{2 |\vec{v}_0|^2 \cos 45^\circ \sin 45^\circ}{9.8} \rightarrow$$

$$10 = \frac{|\vec{v}_0|^2 (\frac{\sqrt{2}}{2})(\frac{\sqrt{2}}{2})}{4.9} \rightarrow$$

$$49 = |\vec{v}_0|^2 \left(\frac{1}{2}\right) \rightarrow 98 = |\vec{v}_0|^2 \rightarrow$$

$$|\vec{v}_0| \approx 9.9 \text{ m./sec.}$$

b.) Assume that $|\vec{v}_0| = 9.9 \text{ m./sec.}$
and downrange $x(t) = 6 \text{ m.}$; then

$$x = \frac{2 |\vec{v}_0|^2 \cos \alpha \sin \alpha}{g} \rightarrow$$

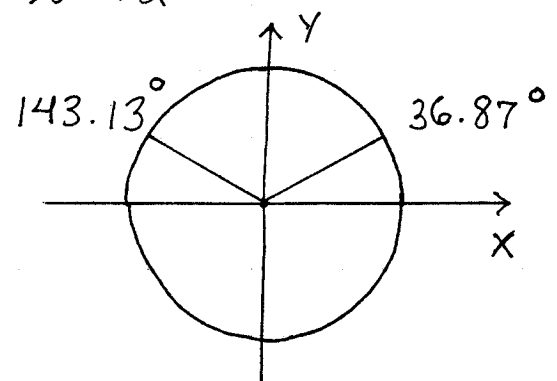
$$6 = \frac{2 (9.9)^2}{9.8} \cos \alpha \sin \alpha \rightarrow$$

$$\frac{(6)(9.8)}{(9.9)^2} = 2 \sin \alpha \cos \alpha = \sin 2\alpha \rightarrow$$

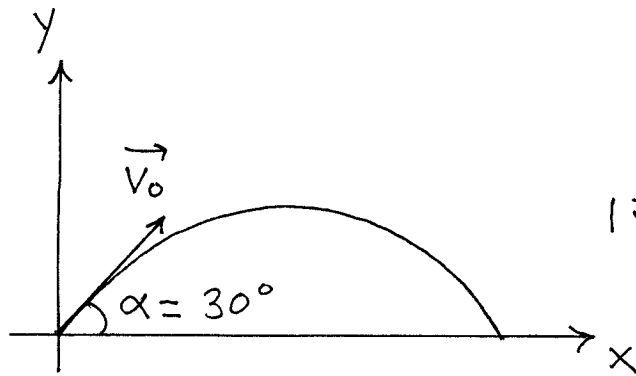
$$\sin 2\alpha \approx 0.6 \rightarrow$$

$$2\alpha \approx 36.87 \text{ or } 143.13 \rightarrow$$

$$\alpha \approx 18.4^\circ \text{ or } \alpha \approx 71.6^\circ$$



11.)



$$|\vec{v}_0| = 90 \text{ ft./sec.}$$

$$x(t) = |\vec{v}_0| \cos \alpha \cdot t \quad \text{and} \quad x(t) = 135 \text{ ft.} \rightarrow$$

$$135 = (90) \cos 30^\circ \cdot t \rightarrow$$

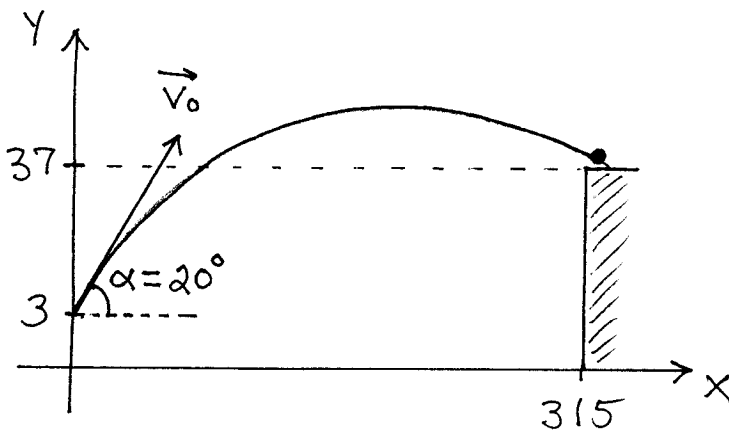
$$135 = (90) \left(\frac{\sqrt{3}}{2}\right) t \rightarrow t = \frac{135}{45\sqrt{3}} \approx 1.732 \text{ sec.};$$

$$\text{and } y(t) = |\vec{v}_0| \sin \alpha \cdot t - \frac{1}{2} g t^2$$

$$\approx (90)(\sin 30^\circ)(1.732) - \frac{1}{2}(32)(1.732)^2$$

$\approx 29.94 \text{ ft.}$, so golf ball hits top of 30-ft. tree!

13.)



$$\begin{cases} x(t) = |\vec{v}_0| \cos 20^\circ \cdot t \end{cases}$$

$$\begin{cases} y(t) = 3 + |\vec{v}_0| \sin 20^\circ \cdot t - \frac{1}{2}(32)t^2 \end{cases} \rightarrow$$

$$\begin{cases} 315 = |\vec{v}_0| \cos 20^\circ \cdot t \end{cases}$$

$$\begin{cases} 37 = 3 + |\vec{v}_0| \sin 20^\circ \cdot t - 16t^2 \end{cases} \rightarrow$$

$$t = \frac{315}{|\vec{v}_0| \cos 20^\circ} \quad \text{so that}$$

$$34 = |\vec{v}_0| \sin 20^\circ \left(\frac{315}{|\vec{v}_0| \cos 20^\circ} \right) - 16 \left(\frac{315}{|\vec{v}_0| \cos 20^\circ} \right)^2 \rightarrow$$

$$34 - 315 \frac{\sin 20^\circ}{\cos 20^\circ} = \frac{-16(315)^2}{|\vec{v}_0|^2 \cos^2 20^\circ} \rightarrow$$

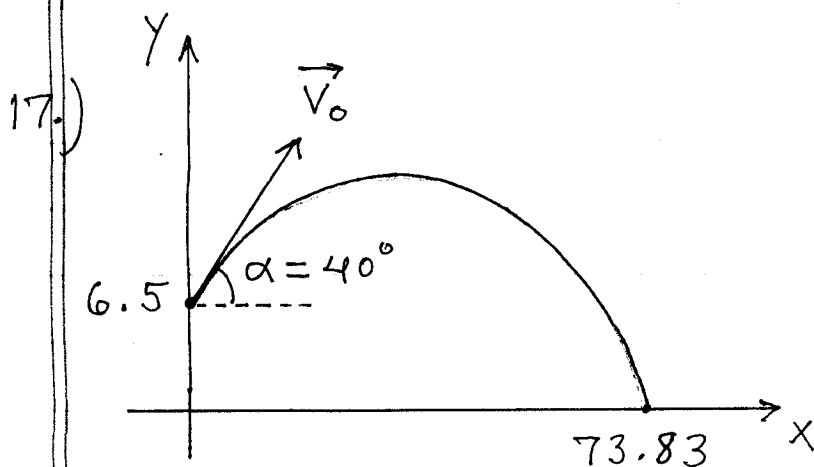
$$|\vec{v}_0|^2 = \frac{\frac{-16(315)^2}{\cos^2 20^\circ}}{34 - 315 \frac{\sin 20^\circ}{\cos 20^\circ}} \cdot \frac{\cos^2 20^\circ}{\cos^2 20^\circ}$$

$$= \frac{-16(315)^2}{34 \cos^2 20^\circ - 315 \sin 20^\circ \cos 20^\circ} \approx 22,292.65$$

$$\rightarrow |\vec{v}_0| \approx \sqrt{22,292.65} \approx \boxed{149.3 \text{ ft./sec.}}$$

and

$$t = \frac{315}{|\vec{v}_0| \cos 20^\circ} \approx \frac{315}{(149.3) \cos 20^\circ} \approx \boxed{2.24 \text{ sec.}}$$



$$\begin{cases} x(t) = |\vec{v}_0| \cdot \cos 40^\circ \cdot t \\ y(t) = 6.5 + |\vec{v}_0| \sin 40^\circ \cdot t - \frac{1}{2}(32)t^2 \end{cases}$$

$$\begin{cases} 73.83 = |\vec{v}_0| \cos 40^\circ \cdot t \\ 0 = 6.5 + |\vec{v}_0| \sin 40^\circ t - 16t^2 \end{cases} \rightarrow$$

$$t = \frac{73.83}{|\vec{v}_0| \cos 40^\circ} \quad \text{so that}$$

$$0 = 6.5 + |\vec{v}_0| \sin 40^\circ \cdot \left(\frac{73.83}{|\vec{v}_0| \cos 40^\circ} \right) - 16 \left(\frac{73.83}{|\vec{v}_0| \cos 40^\circ} \right)^2$$

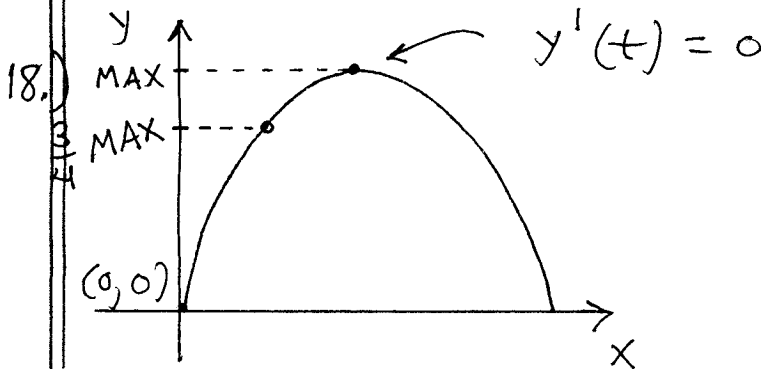
$$\rightarrow 16 \frac{(73.83)^2}{|\vec{v}_0|^2 \cos^2 40^\circ} = 6.5 + \frac{73.83 \sin 40^\circ}{\cos 40^\circ} \rightarrow$$

$$|\vec{v}_0|^2 = \frac{\frac{16 (73.83)^2}{\cos^2 40^\circ}}{6.5 + \frac{73.83 \sin 40^\circ}{\cos 40^\circ}} \cdot \frac{\cos^2 40^\circ}{\cos^2 40^\circ} \rightarrow$$

$$|\vec{v}_0|^2 = \frac{16 (73.83)^2}{6.5 \cos^2 40^\circ + 73.83 \sin 40^\circ \cos 40^\circ}$$

$$\approx 2171.2 \quad \text{so}$$

$$|\vec{v}_0| \approx \sqrt{2171.2} \approx 46.6 \text{ ft./sec.}$$



$$y(t) = |\vec{v}_0| \sin \alpha \cdot t - \frac{1}{2} g t^2 \quad \underline{D} \rightarrow$$

$$y'(t) = |\vec{v}_0| \sin \alpha - g t = 0 \quad \rightarrow$$

$$t_{\max} = \frac{|\vec{v}_0| \sin \alpha}{g} \text{ and } \underline{\text{maximum height}} \text{ is}$$

$$y = |\vec{v}_0| \sin \alpha \cdot \left(\frac{|\vec{v}_0| \sin \alpha}{g} \right) - \frac{1}{2} g \left(\frac{|\vec{v}_0| \sin \alpha}{g} \right)^2$$

$$y_{\max} = \boxed{\frac{|\vec{v}_0|^2 \sin^2 \alpha}{2g}} ; \text{ if } t = \frac{1}{2} t_{\max} = \frac{|\vec{v}_0| \sin \alpha}{2g}$$

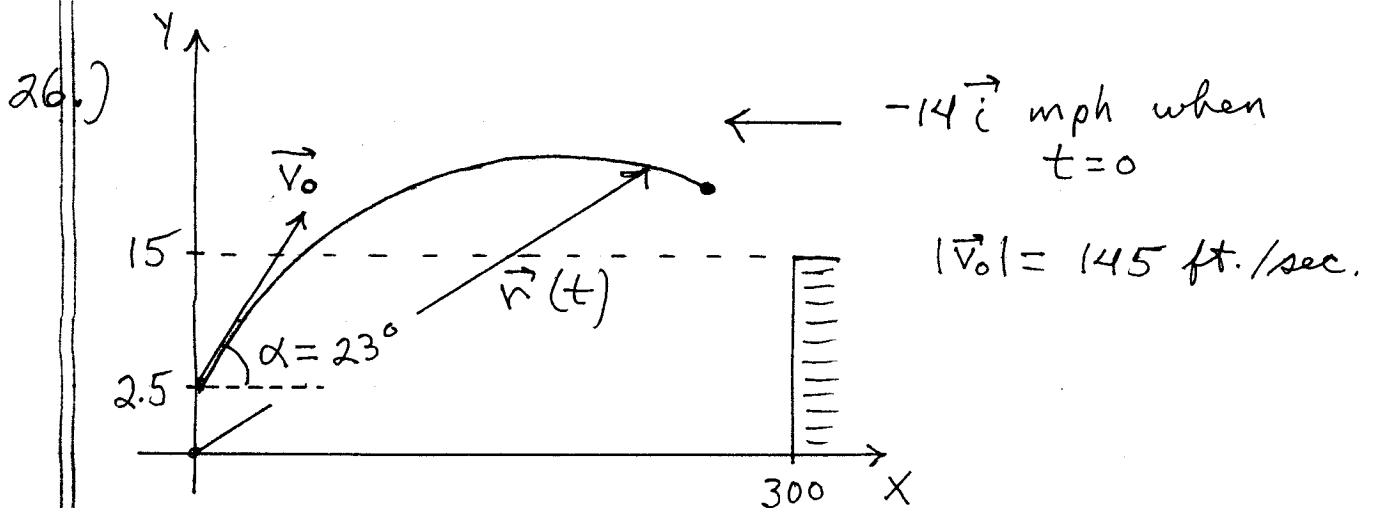
then

$$y = |\vec{v}_0| \sin \alpha \cdot \left(\frac{|\vec{v}_0| \sin \alpha}{2g} \right) - \frac{1}{2} g \left(\frac{|\vec{v}_0| \sin \alpha}{2g} \right)^2$$

$$= \frac{4}{8} \cdot \frac{|\vec{v}_0|^2 \sin^2 \alpha}{g} - \frac{1}{8} \cdot \frac{|\vec{v}_0|^2 \sin^2 \alpha}{g}$$

$$= \frac{3}{8} \cdot \frac{|\vec{v}_0|^2 \sin^2 \alpha}{g} = \frac{3}{4} \cdot \frac{|\vec{v}_0|^2 \sin^2 \alpha}{2g}$$

$$= \frac{3}{4} \cdot y_{\max}$$



$$x(t) = (|\vec{v}_0| \cos \alpha - 14) t = (145 \cos 23^\circ - 14) t,$$

$$\begin{aligned}
 y(t) &= 2.5 + |\vec{v}_0| \sin \alpha \cdot t - \frac{1}{2} g t^2 \\
 &= 2.5 + (145) \sin 23^\circ \cdot t - \frac{1}{2} (32) t^2 \\
 &= 2.5 + (145) \sin 23^\circ \cdot t - 16 t^2 \quad \text{so}
 \end{aligned}$$

$$\begin{aligned}
 \text{a.) } \vec{r}(t) &= (45 \cos 23^\circ - 14) t \cdot \vec{i} \\
 &\quad + (2.5 + (145) \sin 23^\circ \cdot t - 16 t^2) \cdot \vec{j}
 \end{aligned}$$

b.) at max. height $y'(t) = 0$:

$$y'(t) = (145) \sin 23^\circ - 32 t = 0 \rightarrow$$

$$t = \frac{(145) \sin 23^\circ}{32} \approx \boxed{1.771 \text{ sec.}} \text{ and}$$

$$y = 2.5 + (145) \sin 23^\circ \cdot (1.771) - 16 (1.771)^2 \rightarrow$$

$$y_{\max} \approx \boxed{52.65 \text{ ft.}}$$

c.) Hit ground ; $y(t) = 0 \rightarrow$

$$2.5 + (145) \sin 23^\circ \cdot t - 16 t^2 = 0 \rightarrow$$

$$t = \frac{-145 \sin 23^\circ \pm \sqrt{145^2 \sin^2 23^\circ - 4(2.5)(-16)}}{2(-16)}$$

$$\approx \frac{-56.656 \pm \sqrt{3369.9}}{-32}$$

$$= \frac{-56.656 \pm 58.051}{-32} \approx \boxed{3.585 \text{ sec.}} ;$$

downrange dist.

$$x = (145 \cos 23^\circ - 14)(3.585) \approx \boxed{428.31 \text{ ft.}}$$

d.) If $y(t) = 20$ ft., then

$$2.5 + (145) \sin 23^\circ \cdot t - 16t^2 = 20 \rightarrow$$

$$0 = 16t^2 + (-145 \sin 23^\circ) \cdot t + 17.5 \rightarrow$$

$$t = \frac{145 \sin 23^\circ \pm \sqrt{(-145 \sin 23^\circ)^2 - 4(16)(17.5)}}{2(16)}$$

$$\approx \frac{56.656 \pm \sqrt{2089.904}}{32}$$

$$\approx \textcircled{3.2 \text{ sec.}} \text{ or } \textcircled{0.342 \text{ sec.}} ;$$

$$X(3.2) = (145 \cos 23^\circ - 14)(3.2) \approx 382.3 \text{ ft.}$$

$$X(0.342) = (145 \cos 23^\circ - 14)(0.342) \approx 40.86 \text{ ft.}$$

e.) Yes, since fence is 15 ft. high and 300 ft. from the batter.

28.) From Projectile Motion handout we know that max. height is

$$y = \frac{|\vec{v}_0|^2 \sin^2 \alpha}{2g} \quad \text{and corresponding}$$

$$x = \frac{|\vec{v}_0|^2}{g} \cos \alpha \sin \alpha ; \text{ then}$$

$$\sin^2 \alpha = \frac{2gy}{|\vec{v}_0|^2} \quad \text{and}$$

$$\begin{aligned}
x^2 &= \frac{|\vec{v}_0|^4}{g^2} \cdot \cos^2 \alpha \cdot \sin^2 \alpha \\
&= \frac{|\vec{v}_0|^4}{g^2} \cdot (1 - \sin^2 \alpha) \cdot \sin^2 \alpha \\
&= \frac{|\vec{v}_0|^4}{g^2} \cdot \left(1 - \frac{2gy}{|\vec{v}_0|^2}\right) \left(\frac{2gy}{|\vec{v}_0|^2}\right) \\
&= \frac{|\vec{v}_0|^2}{g} \cdot \left(1 - \frac{2gy}{|\vec{v}_0|^2}\right) (2y) \\
&= \frac{|\vec{v}_0|^2}{g} \cdot \left(2y - \frac{4gy^2}{|\vec{v}_0|^2}\right) \\
&= \frac{|\vec{v}_0|^2}{g} \cdot \frac{-4g}{|\vec{v}_0|^2} \cdot \left(y^2 - \frac{|\vec{v}_0|^2}{2g} y\right) \\
&= -4 \left(y^2 - \frac{|\vec{v}_0|^2}{2g} y + \frac{|\vec{v}_0|^4}{16g^2}\right) + \frac{|\vec{v}_0|^4}{4g^2} \rightarrow
\end{aligned}$$

$$x^2 + 4 \left(y - \frac{|\vec{v}_0|^2}{4g}\right)^2 = \frac{|\vec{v}_0|^4}{4g^2}$$